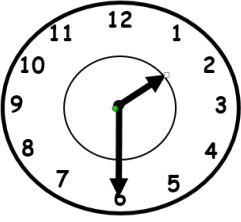
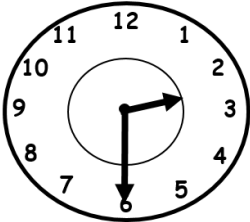
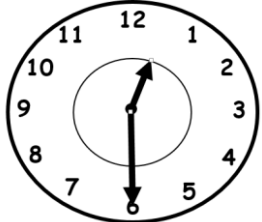


1. Mom made 9 cookies. She gave them all to Sam, Bob, and Bill. Each person got the same amount. How many cookies did each person get?
- _____ cookies each

2. Add.
- | | | |
|-------------------|-------------------|------------------|
| $4 + 44 =$ _____ | $52 + 10 =$ _____ | $10 + 3 =$ _____ |
| $5 + 34 =$ _____ | $44 + 20 =$ _____ | $24 + 1 =$ _____ |
| $24 + 60 =$ _____ | $26 + 30 =$ _____ | $4 + 80 =$ _____ |

3. Count forward by ones. Write the numbers.
- 52** _____, _____, _____, _____, _____, _____
- Count forward by tens. Write the numbers.
- 52** _____, _____, _____, _____, _____, _____

4. Which clock shows 1:30?
- 


- O**

O

O

5. Use the picture graph to answer the questions.

Our Favorite Subjects								
math	😊	😊	😊	😊	😊			
reading	😊	😊	😊	😊	😊	😊		
science	😊	😊	😊	😊				

Each 😊 stands for 1 child.

1. How many children like reading best? _____

2. How many more children chose reading than math? _____

3. How many children chose math and science altogether? _____

4. What subject did the fewest children pick? _____

5. How many fewer children like science than reading? _____