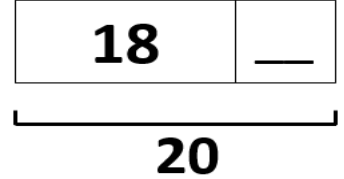
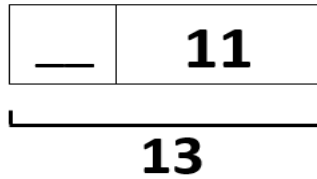
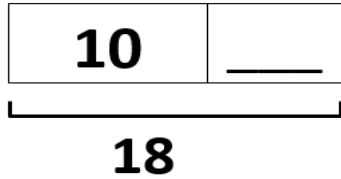


1. There were 3 vases of flowers on the table. Each vase had 4 flowers.
How many flowers in all?

_____ flowers

2. Find the missing parts.



3. Write related facts for 20, 16, and 4.

_____ + _____ = _____

_____ - _____ = _____

_____ + _____ = _____

_____ - _____ = _____

4. Which are true? Circle your answers.

4 - 4 = 2 - 2

10 + 4 = 8 + 4 + 2

10 - 1 = 8 + 1

22 > 25

20 + 30 = 30 + 10

11 - 3 < 7 + 2

5. Jessie asked her friends about their favorite color.

Favorite Colors								

Each ☺ stands for 1 child.

Here is what they said:

Jan, Bill, Bob and Stan like blue.
Sue, Wanda, Will and Tom like red.
Sam, Cindy and Don like yellow.

Make the picture graph match the above data. Then answer the questions.

1. How many children like blue and red best? _____

2. How many more children chose red than yellow? _____